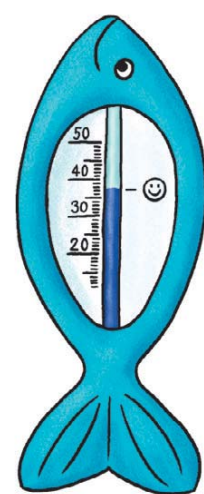
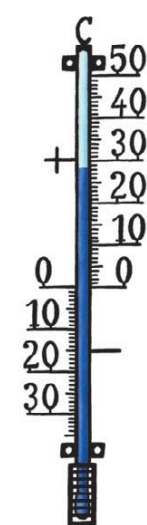

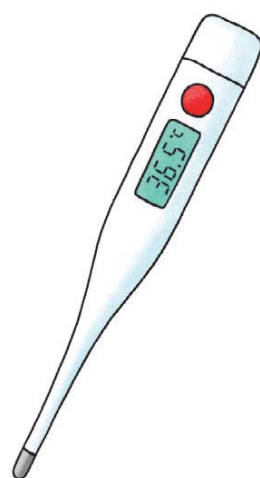




- Ordne den verschiedenen Thermometern die Namen zu: **Badethermometer**, **Fieberthermometer**, **Tiefkühlthermometer**, **Innenthermometer**, **Außenthermometer**.

Heute haben wir 14 Grad Celsius.



Thermometer

_____	_____	_____	_____	_____
_____	_____	_____	_____	_____