


Multiplikation mit 4

1 Finde die Malaufgabe.

a) Wie viele Räder?



$$\underline{\quad} \cdot 4 = \underline{\quad}$$



$$\underline{\quad} \cdot 4 = \underline{\quad}$$




$$\underline{\quad} \cdot 4 = \underline{\quad}$$


b) Wie viele Beine?



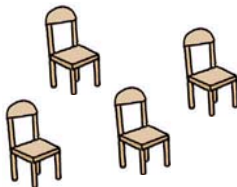
$$\underline{\quad} \cdot 4 = \underline{\quad}$$




$$\underline{\quad} \cdot 4 = \underline{\quad}$$




$$\underline{\quad} \cdot 4 = \underline{\quad}$$



$$\underline{\quad} \cdot 4 = \underline{\quad}$$




$$\underline{\quad} \cdot 4 = \underline{\quad}$$




$$\underline{\quad} \cdot 4 = \underline{\quad}$$


2 Male ein passendes Bild.



$$7 \cdot 4 = \underline{\quad}$$



$$2 \cdot 4 = \underline{\quad}$$



$$0 \cdot 4 = \underline{\quad}$$

Forscheraufgabe

Für ein Spiel braucht jeder Mitspieler 4 Karten. 5 Kinder spielen mit. Wie viele Karten musst du verteilen?